

Vocab

GTG

GTG

Your Answer

This image shows a single sheet of white paper with horizontal ruling lines. The lines are evenly spaced and run across the width of the page. There are no margins, text, or other markings on the paper.

Instruction

Order of operations


Parenthesis (_)

Exponents 2^2

Multiply \times Divide $/$

Add $+$ Subtract $-$

From left to right



Instruction

Order of operations



Parenthesis (_)

Exponents 2^2

Multiply \times Divide $/$

Add $+$ Subtract $-$

From left to right



Instruction

Order of operations



Parenthesis (_)

Exponents 2^2

Multiply \times Divide $/$

Add $+$ Subtract $-$

From left to right



Instruction

Order of operations



Parenthesis (_)

Exponents 2^2

Multiply \times Divide $/$

Add $+$ Subtract $-$

From left to right



Instruction

Order of operations



Parenthesis (_)

Exponents 2^2

Multiply \times Divide $/$

Add $+$ Subtract $-$

From left to right



Instruction

Order of operations



Parenthesis (_)

Exponents 2^2

Multiply \times Divide $/$

Add $+$ Subtract $-$

From left to right



Instruction

Order of operations


Parenthesis (_)

Exponents 2^2

Multiply \times Divide $/$

Add $+$ Subtract $-$

From left to right

This image shows a single sheet of white paper with horizontal blue or grey ruling lines. The lines are evenly spaced and run across the width of the page. There are no margins, text, or other markings on the paper.

Company Activity

$6^2 + 8 - (4 \times 2) + 5 \times 7 =$

1.	4.
2.	5.
3.	6.

Company Activity

$6^2 + 8 - (4 \times 2) + 5 \times 7 =$

1.	4.
2.	5.
3.	6.

Company Activity

$6^2 + 8 - (4 \times 2) + 5 \times 7 =$

1. 4.
2. 5.
3. 6.

Company Activity

$6^2 + 8 - (4 \times 2) + 5 \times 7 =$

1.	4.
2.	5.
3.	6.

Company Activity

$6^2 + 8 - (4 \times 2) + 5 \times 7 =$

1.	4.
2.	5.
3.	6.

Company Activity

$6^2 + 8 - (4 \times 2) + 5 \times 7 =$

1.	4.
2.	5.
3.	6.

Company Activity

$6^2 + 8 - (4 \times 2) + 5 \times 7 =$

1.	4.
2.	5.
3.	6.

Company Activity

$6^2 + 8 - (4 \times 2) + 5 \times 7 =$

1.	4.
2.	5.
3.	6.

This image shows a single sheet of white paper with horizontal ruling lines. The lines are evenly spaced and run across the width of the page. There are no margins, text, or other markings on the paper.

Solo Runthrough

$6^2 + 17 - (3 - 2) + 15/3 =$

ECC

$6^2 + 5^2 - (10 - 2)^2 =$

Solo Runthrough

$6^2 + 17 - (3 - 2) + 15/3 =$

ECC

$6^2 + 5^2 - (10 - 2)^2 =$

Solo Runthrough

$6^2 + 17 - (3 - 2) + 15/3 =$

ECC

$6^2 + 5^2 - (10 - 2)^2 =$

Solo Runthrough

$6^2 + 17 - (3 - 2) + 15/3 =$

ECC

$6^2 + 5^2 - (10 - 2)^2 =$

This image shows a single sheet of white paper with horizontal blue or grey ruling lines. The lines are evenly spaced and run across the width of the page. There are no margins, text, or other markings on the paper.

Lesson Rewind

Today we explored-

An example of the topic-



Lesson Rewind

Today we explored-

An example of the topic-



Lesson Rewind

Today we explored-

An example of the topic-

This image shows a single sheet of white paper with horizontal blue or grey ruling lines. The lines are evenly spaced and run across the width of the page. There are no margins, text, or other markings on the paper.